

**VIDYA BHAWAN BALIKA VIDYA PITH**  
शक्तिउत्थानआश्रमलखीसरायबिहार

Class 06 Sub-.Maths

Date 29.07.2020

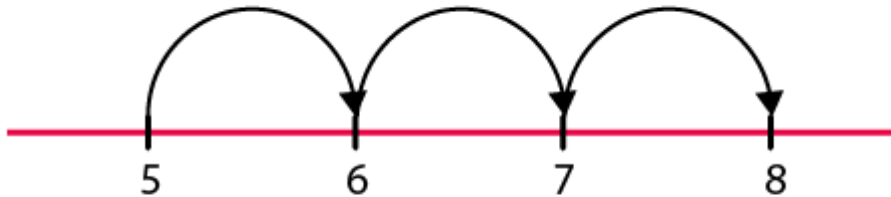
Teacher Name –Krishna Kanhaiya

1. Using the number line write the integer which is:

- (a) 3 more than 5
- (b) 5 more than  $-5$
- (c) 6 less than 2
- (d) 3 less than  $-2$

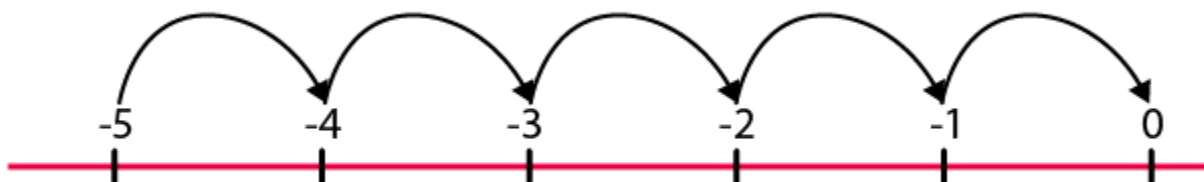
Solutions:

(a)



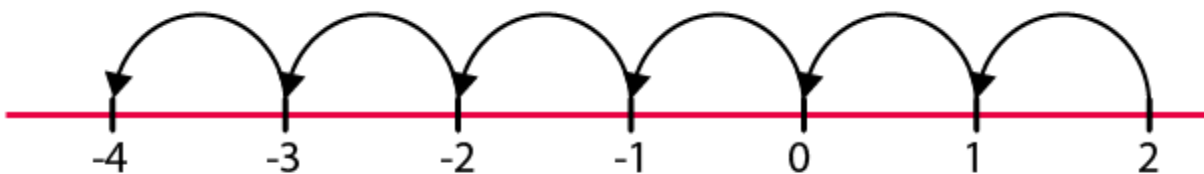
Hence, 8

(b)



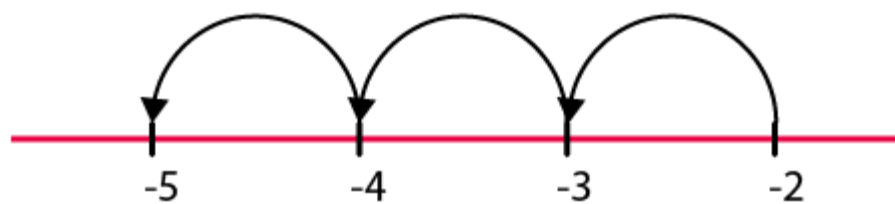
Hence, 0

(c)



Hence, -4

(d)



Hence, -5

**2. Use number line and add the following integers:**

**(a)  $9 + (-6)$**

**(b)  $5 + (-11)$**

(c)  $(-1) + (-7)$

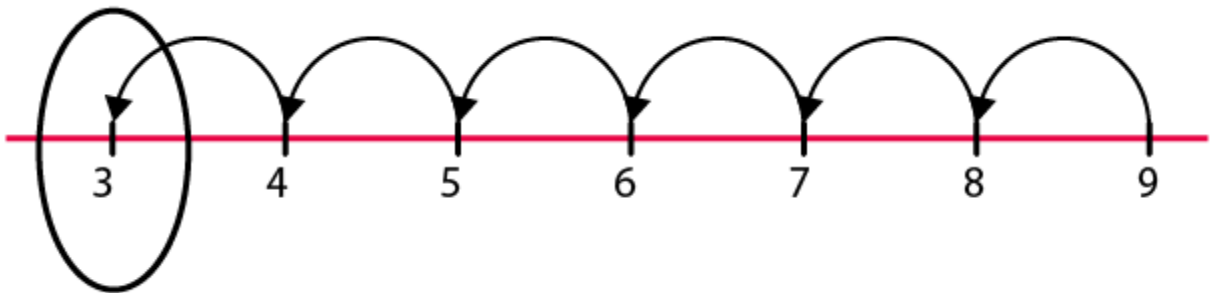
(d)  $(-5) + 10$

(e)  $(-1) + (-2) + (-3)$

(f)  $(-2) + 8 + (-4)$

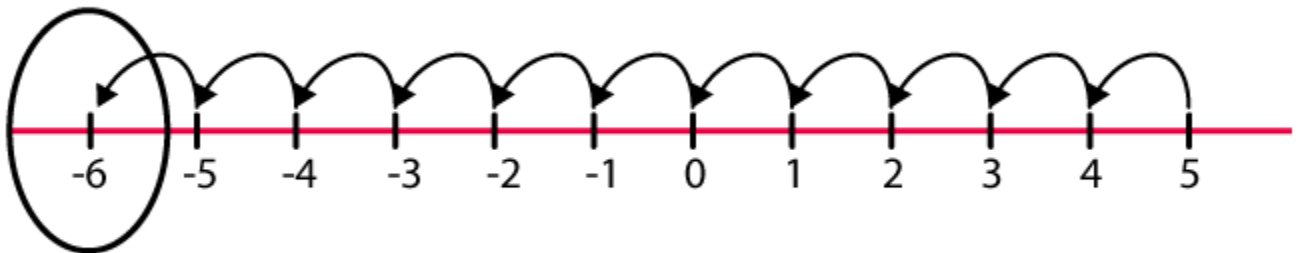
**Solutions:**

(a)



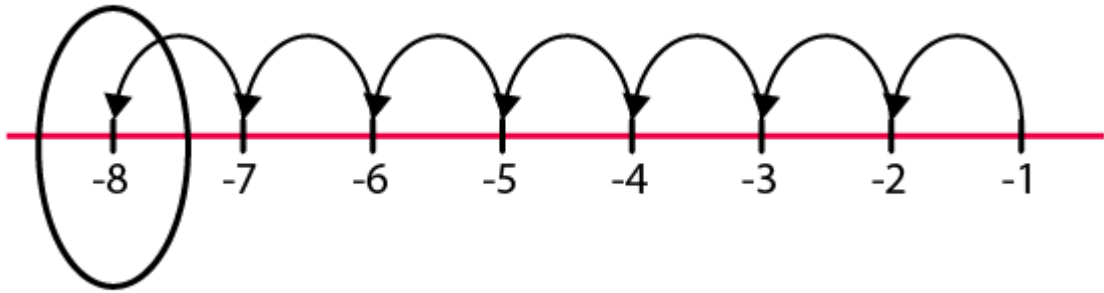
Hence, 3

(b)



Hence, -6

(c)



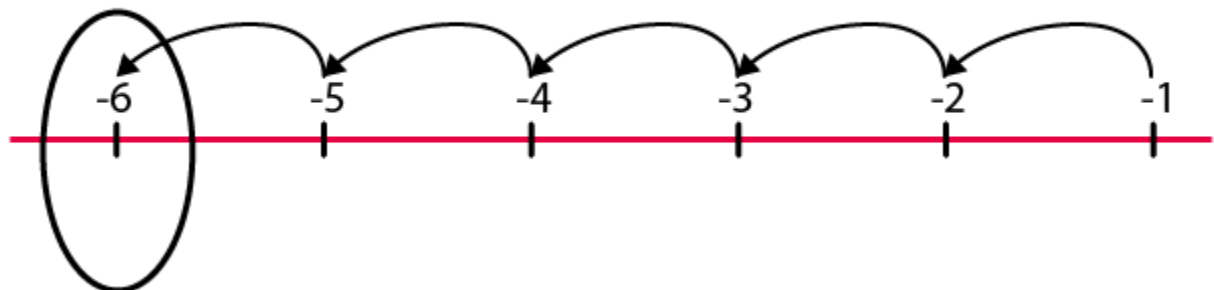
Hence, -8

(d)



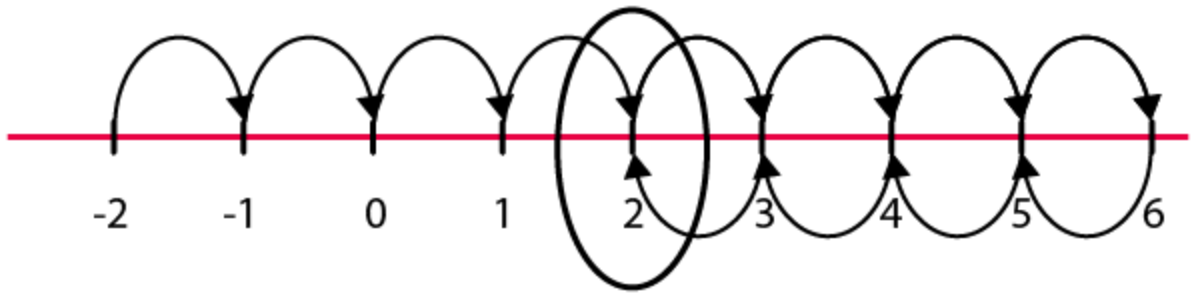
Hence, 5

(e)



Hence, -6

(f)



Hence, 2

**3. Add without using number line:**

(a)  $11 + (-7)$

(b)  $(-13) + (+18)$

(c)  $(-10) + (+19)$

(d)  $(-250) + (+150)$

(e)  $(-380) + (-270)$

(f)  $(-217) + (-100)$

**Solutions:**

(a)  $11 + (-7) = 4$

(b)  $(-13) + (+18) = 5$

(c)  $(-10) + (+19) = 9$

(d)  $(-250) + (+150) = -100$

(e)  $(-380) + (-270) = -650$

(f)  $(-217) + (-100) = -317$